

1. Subtrahiere und ordne die Fachbegriffe richtig zu.

$$240 - 70 = 170$$

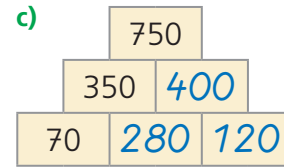
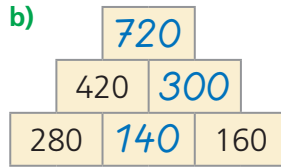
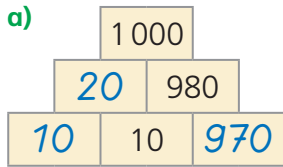
Minuend Subtrahend Differenz

Minuend

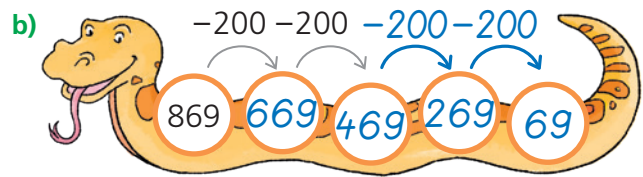
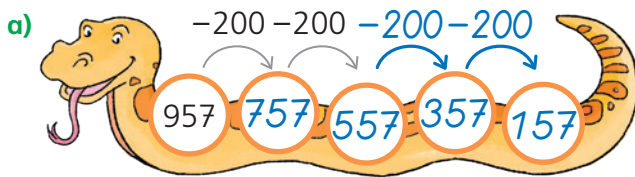
Differenz

Subtrahend

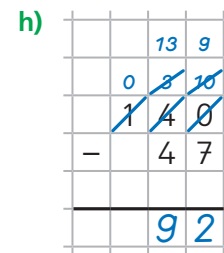
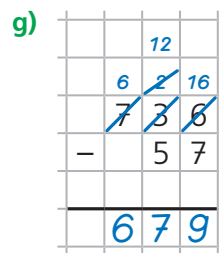
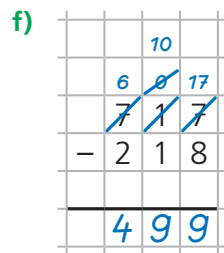
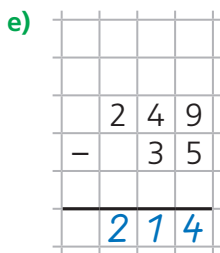
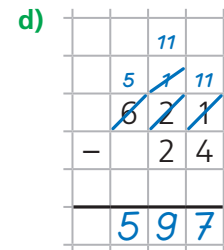
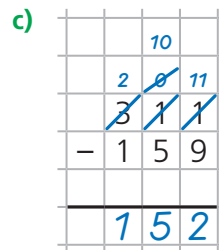
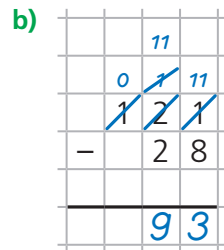
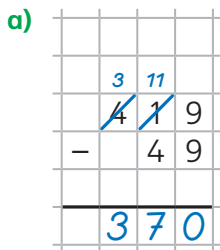
2. Rechne.



3. Subtrahiere weiter.



* 4. Subtrahiere schriftlich.



* 5. Im Kopf oder schriftlich? Rechne.

a) $934 - 356 = 578$

b) $500 - 270 = 230$

c) $825 - 100 = 725$

d) $799 - 200 = 599$

e) $670 - 219 = 451$

f) $300 - 193 = 107$

g) $556 - 338 = 218$

h) $827 - 600 = 227$

i) $901 - 707 = 194$

